

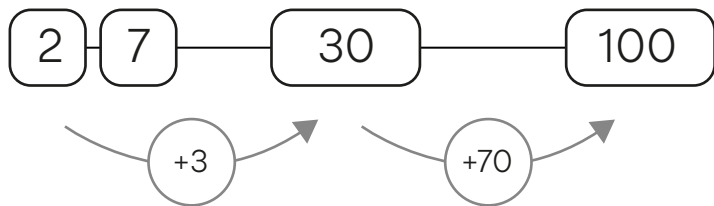
Ergänzen auf 1000

- 1 Würfle mit drei zehenseitigen Würfeln.
- 2 Schreibe jeweils eine Ziffer zu einem Stellenwert (Tausender, Hunderter, Zehner, Einer). Achte darauf, dass bei den Einern keine 0 steht.
- 3 Ergänze auf 1000. Zeige am Zahlenstrahl und schreibe die Rechnung auf.

Beispiel

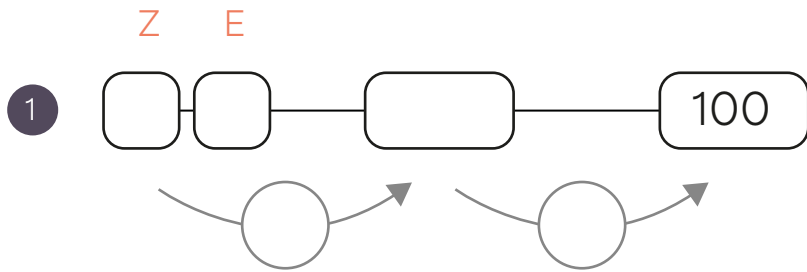


Z E

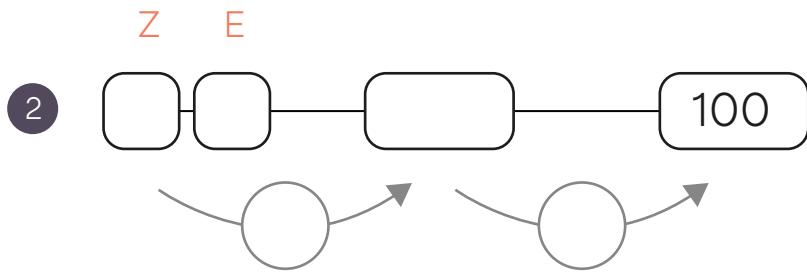


$$\begin{array}{|c|c|} \hline 2 & 7 \\ \hline \end{array} + \begin{array}{|c|c|} \hline 7 & 3 \\ \hline \end{array} = 100$$

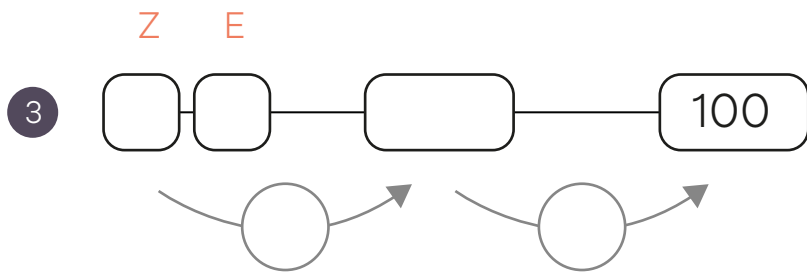
Name: _____



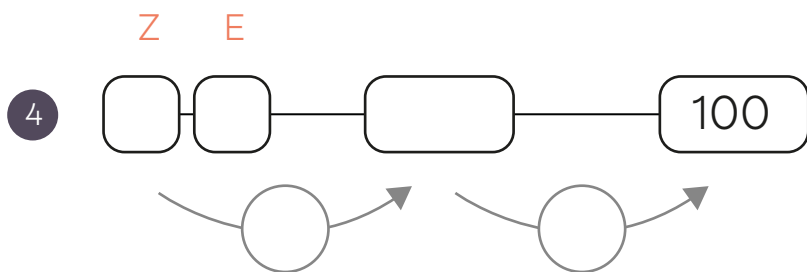
$$\begin{array}{|c|} \hline \\ \hline \end{array} + \begin{array}{|c|} \hline \\ \hline \end{array} = 100$$



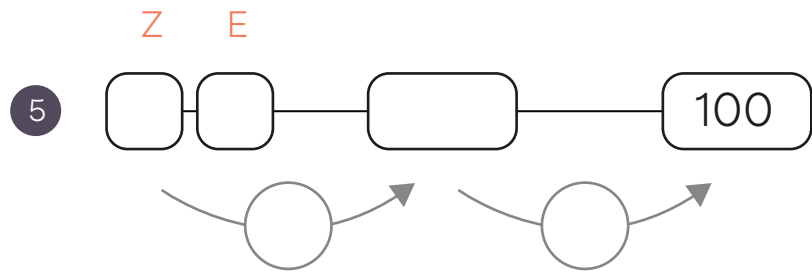
$$\begin{array}{|c|} \hline \\ \hline \end{array} + \begin{array}{|c|} \hline \\ \hline \end{array} = 100$$



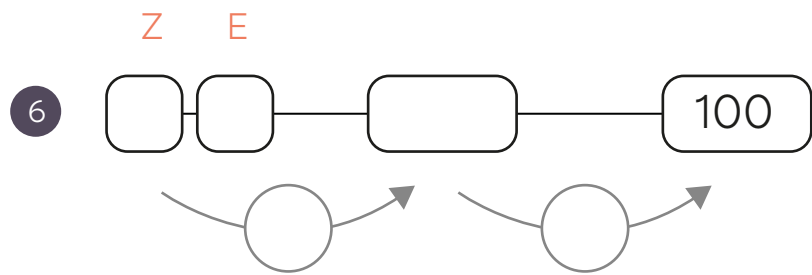
$$\begin{array}{|c|} \hline \\ \hline \end{array} + \begin{array}{|c|} \hline \\ \hline \end{array} = 100$$



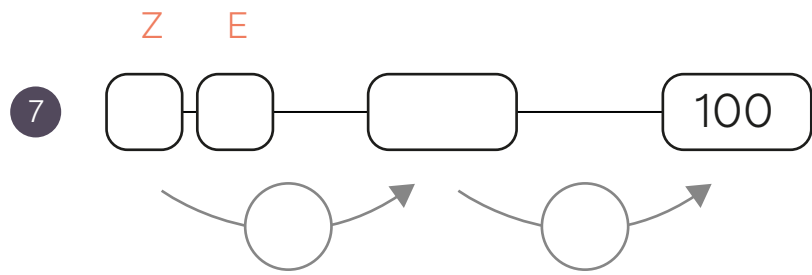
$$\begin{array}{|c|} \hline \\ \hline \end{array} + \begin{array}{|c|} \hline \\ \hline \end{array} = 100$$



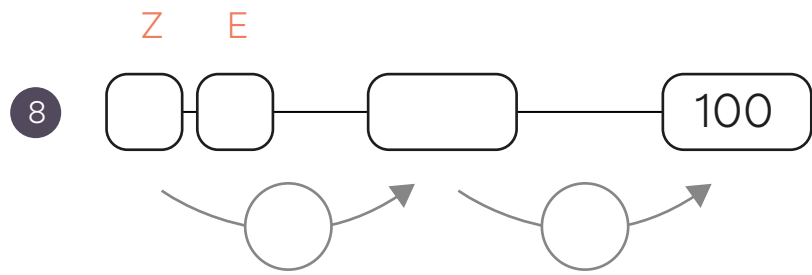
$$\begin{array}{|c|} \hline \\ \hline \end{array} + \begin{array}{|c|} \hline \\ \hline \end{array} = 100$$



$$\begin{array}{|c|} \hline \\ \hline \end{array} + \begin{array}{|c|} \hline \\ \hline \end{array} = 100$$



$$\begin{array}{|c|} \hline \\ \hline \end{array} + \begin{array}{|c|} \hline \\ \hline \end{array} = 100$$



$$\begin{array}{|c|} \hline \\ \hline \end{array} + \begin{array}{|c|} \hline \\ \hline \end{array} = 100$$